

Paper Reference(s) 1PE0/02  
Pearson Edexcel Level 1/2 GCSE (9–1)

Physical Education  
COMPONENT 2: Health and Performance

Monday 3 June 2024 – Afternoon

Time: 1 hour 15 minutes

Diagram Booklet

THIS DIAGRAM BOOKLET MUST BE RETURNED WITH THE QUESTION PAPER AT THE END OF THE EXAMINATION.

In the boxes below, write your name, centre number and candidate number.

Surname					
Other names					
Centre Number					
Candidate Number					

## **INSTRUCTIONS**

**There may be spare copies of some diagrams in case you need them.**

## **CONTENTS**

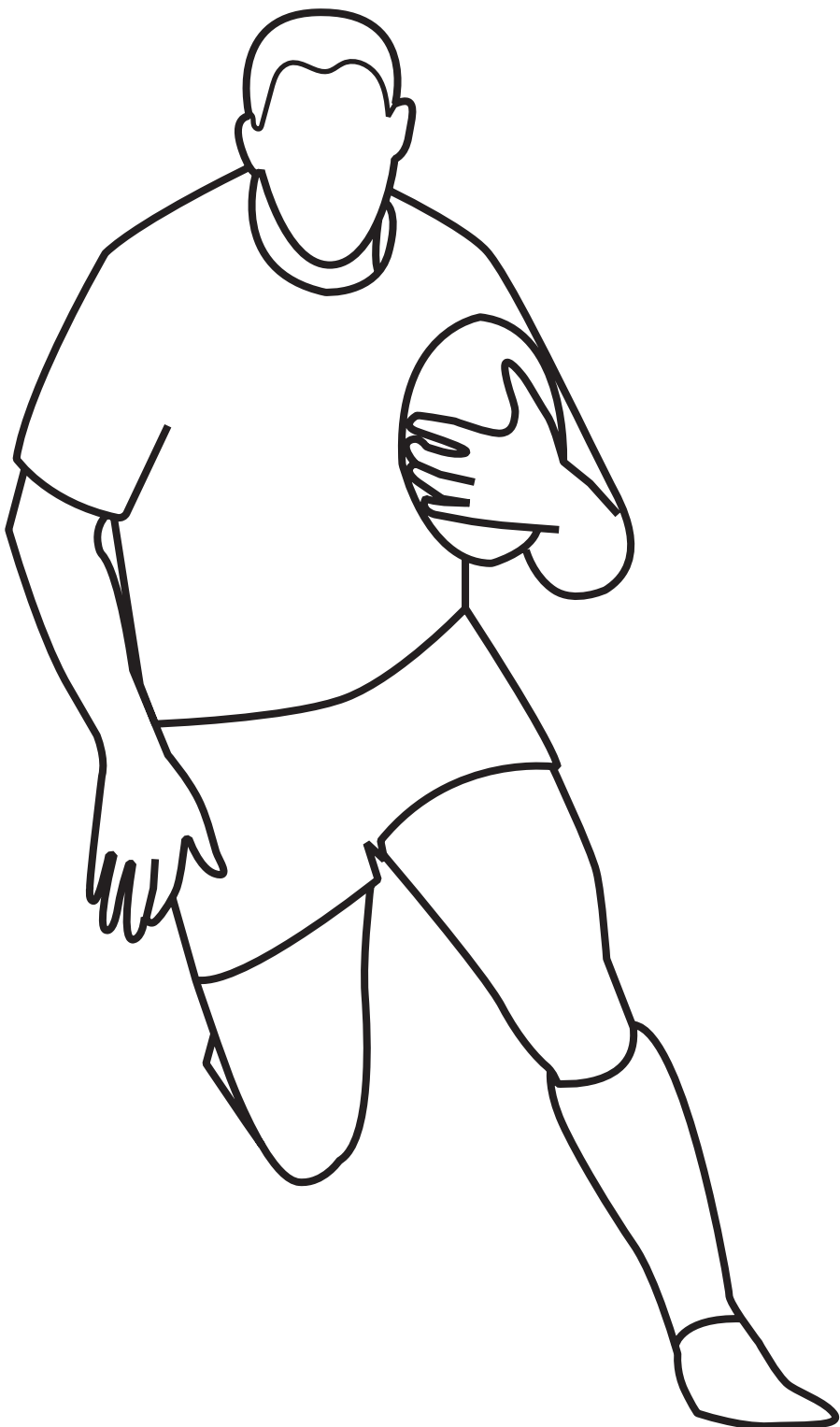
### **Page**

<b>3</b>	<b>Question 3</b>
<b>4</b>	<b>Question 6(a)</b>
<b>5</b>	<b>Questions 6(c) and 6(d)</b>
<b>6</b>	<b>Question 7(b)</b>
<b>7</b>	<b>Question 9</b>
<b>8</b>	<b>Question 14</b>

### Question 3

**FIGURE 1**


**Height: 1·80 m**  
**Weight: 80 kg**



**FIGURE 2**

**Height: 1·80 m**  
**Weight: 77 kg**



**Question 6(a)****FIGURE 3**

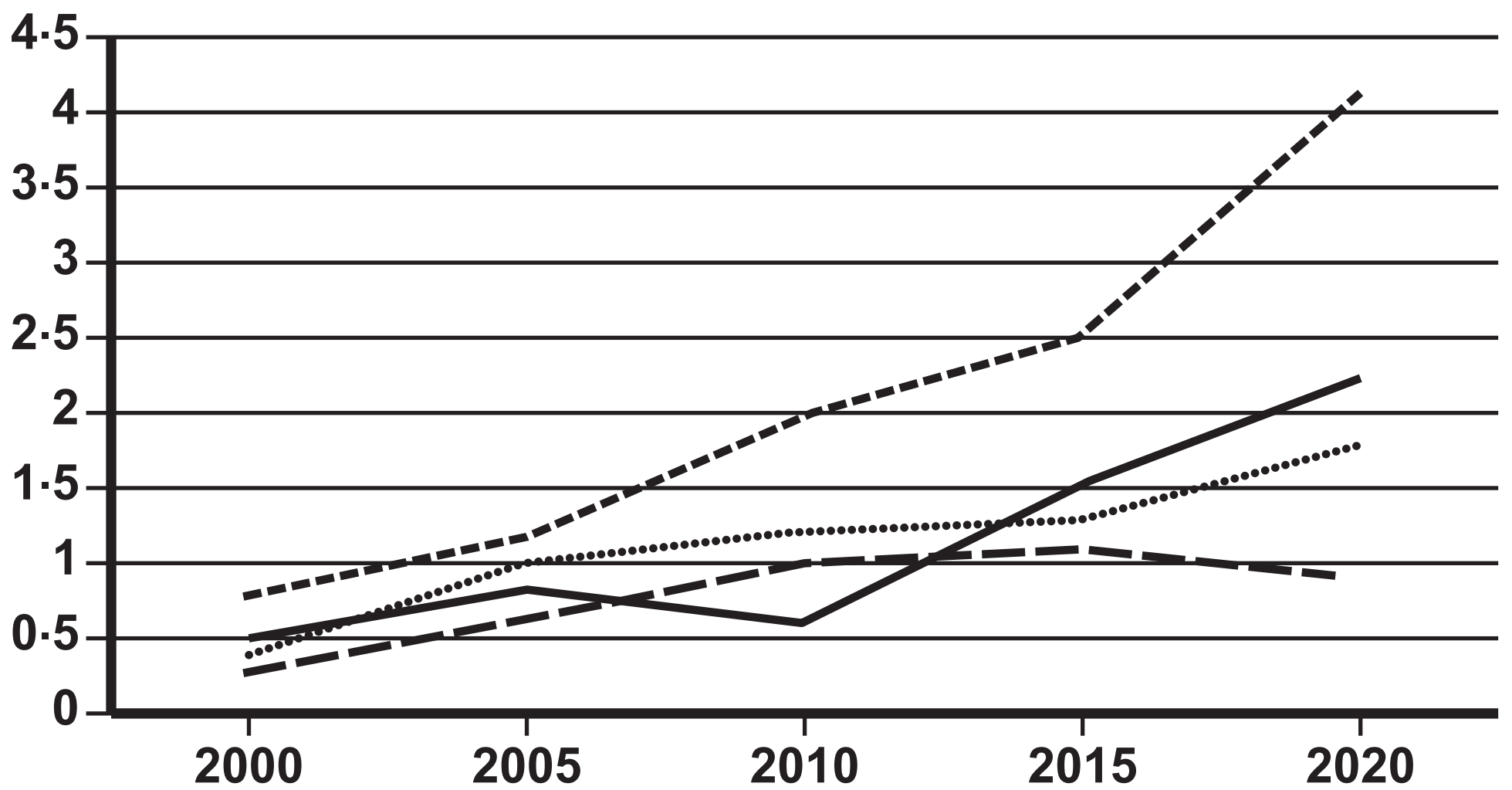
## Questions 6(c) and 6(d)

FIGURE 4

## KEY

- England
- - - - France
- ..... Italy
- Spain

£ Billions



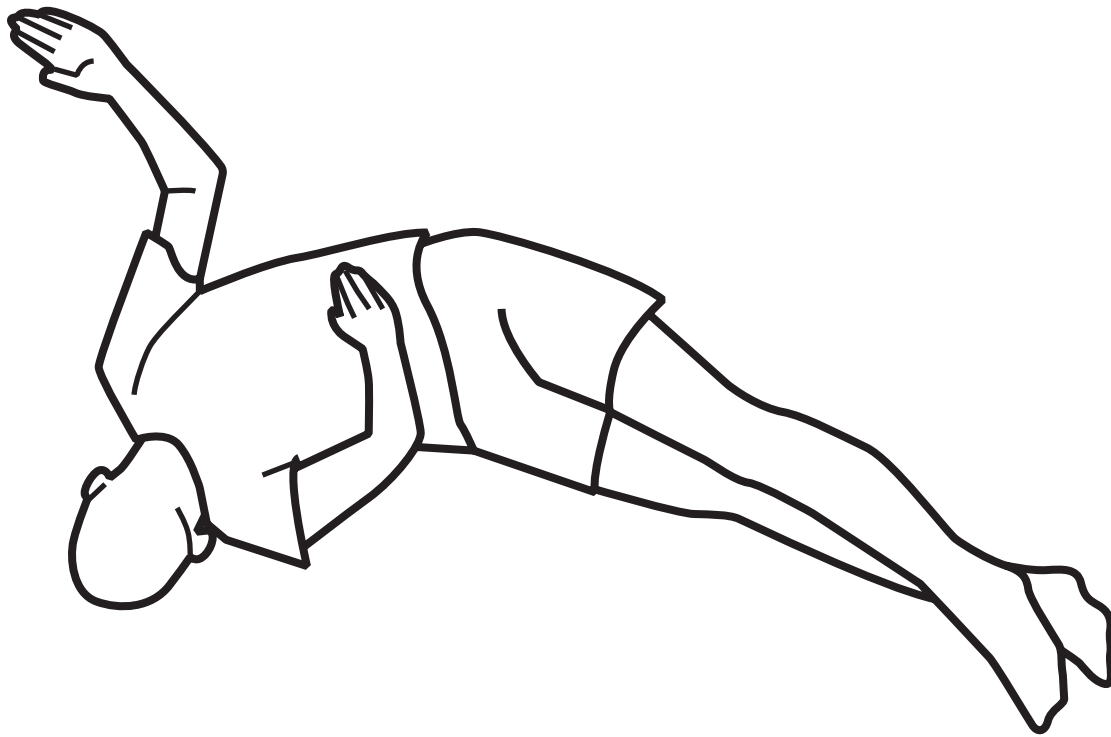
A black and white line drawing of a person in a dynamic, contorted pose. The figure is bent over, with one leg extended forward and the other bent behind, creating a sense of movement and flexibility. The drawing is minimalist, using only black outlines on a white background.

TABLE 1

	Yasmin	Tia	Victoria
Points scored	26	18	16
Assists	8	21	19
Rebounds	19	24	32
Steals	11	7	6
Blocks	4	7	5
Three-point goal percentage scored	20%	45%	40%
Free throw goal percentage scored	95%	90%	85%

## Question 14

FIGURE 7





**Question 3**

**(Source adapted from: © PhotoStock10/Shutterstock (ed))**

**(Source adapted from: © Vitalii Vitleo/Getty Images)**

**Question 6**

**(Source adapted from: © Rawpixel.com/Shutterstock)**

**(Source adapted from: Deloitte)**

**Question 7**

**(Source adapted from: © Pearson Asset Library AL1282569)**

**Question 14**

**(Source adapted from: © Vladimir Vasilovich/Shutterstock)**